



THE ROYAL SAINIK VIDYAPEETH

12 Km stone Balsamand Road, Hisar, Haryana-125001

(A Premier Institute for NDA)



E-mail: info@trsvp.edu.in

M: 99969-10900, 99969-10800

Web: www.trsvp.edu.in

Holiday Homework Summer Vacations Class – 4th A

Hindi

1. रोज एक सुलेख लिखो व उसका शुद्ध रूप से उच्चारण करें।(कम से कम 15)
2. हिंदी नवधारा से कोई तीन कविता लिखे व उसका चित्र बनाएं।
3. एक पेड़ लगाए और पेड़ पौधों की देखभाल करें पेड़ों के महत्व के बारे में लिखें।
4. घर के अंदर या घर के बाहर खेले जाने वाले किसी एक रुचि पूर्ण खेल पर सचित्र जानकारी लिखें।
5. **संज्ञा:** 5 व्यक्तिवाचक, 5 जातिवाचक और 5 भाववाचक संज्ञाओं के उदाहरण लिखिए।
उदाहरण: राम, लड़का, खुश

English

Creative writing:--

Write a short paragraph (60-80 words) on any one of the given topic:

My favourite person

My best friend

If I could fly

Grammar practice:--Revise all the topics (till the syllabus done in class)

Do all the given worksheets

Vocabulary Fun:--

Make your own English dictionary. Write any 15 new words that you learn from your surroundings and write meaning also of that words (in Hindi)

Writing skill:--

Write 10 pages in neat & clean hand writing.

Fun & Creative Activity

Make a colourful chart on any of the following topics:-

*Noun and its types

*Pronoun

Maths

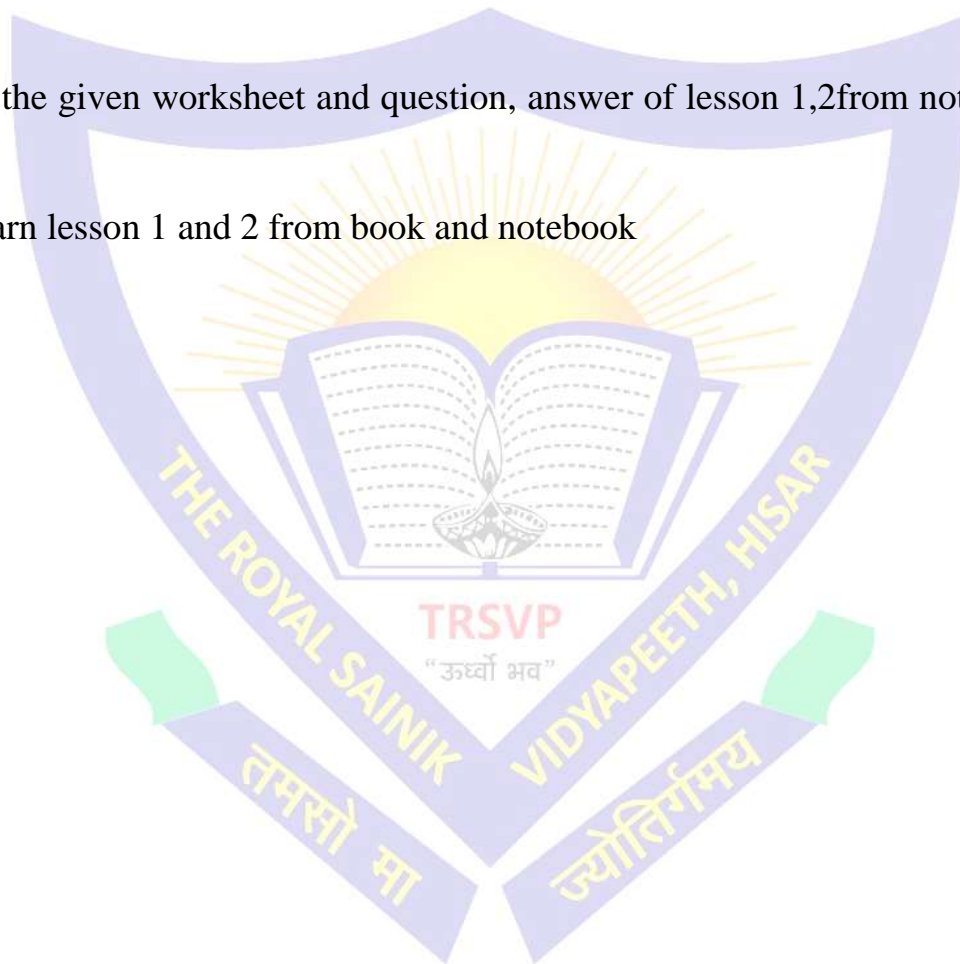
Writing: Write 2 to 20 tables (3 times) in holidays homework notebook and do given worksheet

Learning: Learn 2 to 20 table

EVS

Written -- Do the given worksheet and question, answer of lesson 1,2 from note book in extra note book

Learning -- learn lesson 1 and 2 from book and notebook



Name: _____

The Painted Desert

The Painted Desert, located in Arizona, covers 93,500 acres and stretches over 160 miles. It is called "painted" because of it has colored rocks that look like they were painted. This colorful desert has cliffs and hills. It also has trees that turned to stone long ago. These trees are located in a place called, "the Petrified Forest."

.....

Directions: Answer each question with a complete sentence.

1. Where is the Painted Desert located?

2. Why is it called "painted"?

3. How many acres of land does it cover?

4. How many miles long is the Painted Desert?

5. Name two things you might see in the Painted Desert.

6. What happened to some of the trees here?

Name _____



HOMOPHONES

HOMOPHONES are words that sound the same but have different meanings and spellings.

Color the homophone that completes each sentence, then write it in the blank.

1. I got a dress _____ my birthday.

☐ for

☐ four

2. I _____ the dog barking.

☐ here

☐ hear

3. A rabbit can dig a _____ in the ground.

☐ hole

☐ whole

4. My team _____ the soccer game.

☐ one

☐ won

5. Can you _____ your name?

☐ right

☐ write

6. A bird has _____ legs.

☐ too

☐ two

Name _____

CCSS 1.L.1.b Use common, proper, and possessive nouns.

Nouns

A noun names a person, place, or thing.

Directions: Look for the underlined noun in each sentence. Tell if the noun is a person, place, or thing.

1. The store is open on Sunday.

place

2. The car was in front of the house.

3. She was going to catch the ball.

4. I could not see the boy.

5. Chips are my favorite snack.

6. I got two books from the library.

7. My teacher is very nice to the class.

8. We saw the last leaf fall.

9. He left his bag at the school.

10. The doctor gave me a sucker.

Name: Date:

SINGULAR-PLURAL NOUNS

Write the plurals of these nouns.

toy _____

lion _____

country _____

witch _____

scarf _____

gentleman _____

baby _____

door _____

mouse _____

ox _____

leaf _____

brush _____

gas _____

pony _____

city _____

lady _____



Most nouns
add **-s**
pen- pens



Nouns ending in
-ch, -sh, -s, -ss,
-x add **-es**
box- boxes



Nouns ending in
consonant +y =
-ies
lady- ladies



Nouns ending in
-f/-fe changes
to **-ves**
wife- wives



Certain nouns
that end in
consonant +o
add **-es**
tomato-
tomatoes



संज्ञा

चित्र को ध्यान से देखकर खाली स्थान भरो।

(बकरी बादल आम पक्षी बेंच खिड़कियाँ)



- आकाश में तीन..... उड़ रहे हैं।
- चित्र मेंका एक पेड़ है।
- पेड़ के पास एक..... रखी है।
- सूरज..... के पीछे छिप गया है।
- घर में तीन नीले रंग की..... है।
- चित्र में..... घास खा रही है।

विलोम शब्द

निम्नलिखित शब्दों के विलोम शब्द लिखिए

आज - _____

अल्प - _____

लाल - _____

उच्च - _____

दिन - _____

दया - _____

ऊपर - _____

पुण्य - _____

रोना - _____

अनपढ़ - _____

स्त्री - _____

मीठा - _____

लड़का - _____

नरम - _____

बेटा - _____

पाचक - _____

सच - _____

शिक्षित - _____

काला - _____

अमीर - _____

कच्चा - _____

सुखी - _____

अंदर - _____

अंत - _____

आग - _____

अनेक - _____

देना - _____

अनुराग - _____

जागना - _____

उजाला - _____

समानार्थी शब्द

निम्नलिखित शब्दों के समानार्थी शब्द लिखिए।

पेड़ - _____	दोस्त - _____
रात - _____	सूरज - _____
दिन - _____	सांप - _____
चंद्रमा - _____	हाथी - _____
सूरज - _____	आवाज - _____
आकाश - _____	भोजन - _____
पिता - _____	सहेली - _____
माँ - _____	दिल - _____
पुत्री - _____	मस्तिष्क - _____
पुत्र - _____	महिला - _____
सोना - _____	बेटा - _____
पानी - _____	राजा - _____
पक्षी - _____	भिखारी - _____
भाई - _____	नदी - _____
किताब - _____	बादल - _____

पानी का जादू

पप्पु एक छोटे से गाँव में रहता था। गरमी के दिनों में उसके गाँव में पानी की कमी हो जाती थी। एक दिन, पप्पु ने खुदाई करते समय एक बड़े पत्थर को हिलाया। तभी उसके पास से पानी की एक छोटी धारा बहने लगी। पप्पु ने खुशी-खुशी पानी पीना शुरू किया। अचानक, पानी की धारा बड़ी हो गई और वह एक छोटे से नदी बन गई। सभी गाँववाले आकर पानी पीने लगे और उनकी मुश्किलें खत्म हो गई।

प्रश्न:

1. पप्पु के गाँव में किसकी कमी होती थी?

2. पप्पु ने कैसे गाँववालों की मदद की?

3. पानी की धारा कैसे बड़ी हुई?

4. इस कहानी से हमें क्या सीख मिलती है?

लिंग बदलिए

छात्र	-	<input type="text"/>
धोबी	-	<input type="text"/>
हाथी	-	<input type="text"/>
क्षत्रिय	-	<input type="text"/>
शिक्षक	-	<input type="text"/>
वृद्ध	-	<input type="text"/>
कवि	-	<input type="text"/>
गायक	-	<input type="text"/>
मुर्गा	-	<input type="text"/>
चूहा	-	<input type="text"/>

वृद्धा

चूहिया

मुर्गी

गायिका

हथिनी

कवयित्री

क्षत्राणी

धोबिन

शिक्षिका

छात्रा

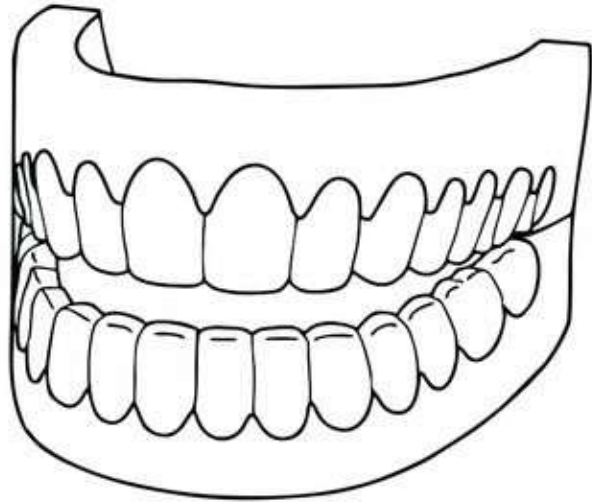
Name _____

Date _____

Teeth Worksheet

Colour these teeth according to the key below!

Incisors - green
Canine - purple
Premolar - blue
Molar - pink
Wisdom - orange



Answer these questions!

1. What is the main function of your teeth?

.....

2. What are the functions of incisors?

.....

3. What is the function of canines?

.....

4. What are the functions of premolar and molars?

.....

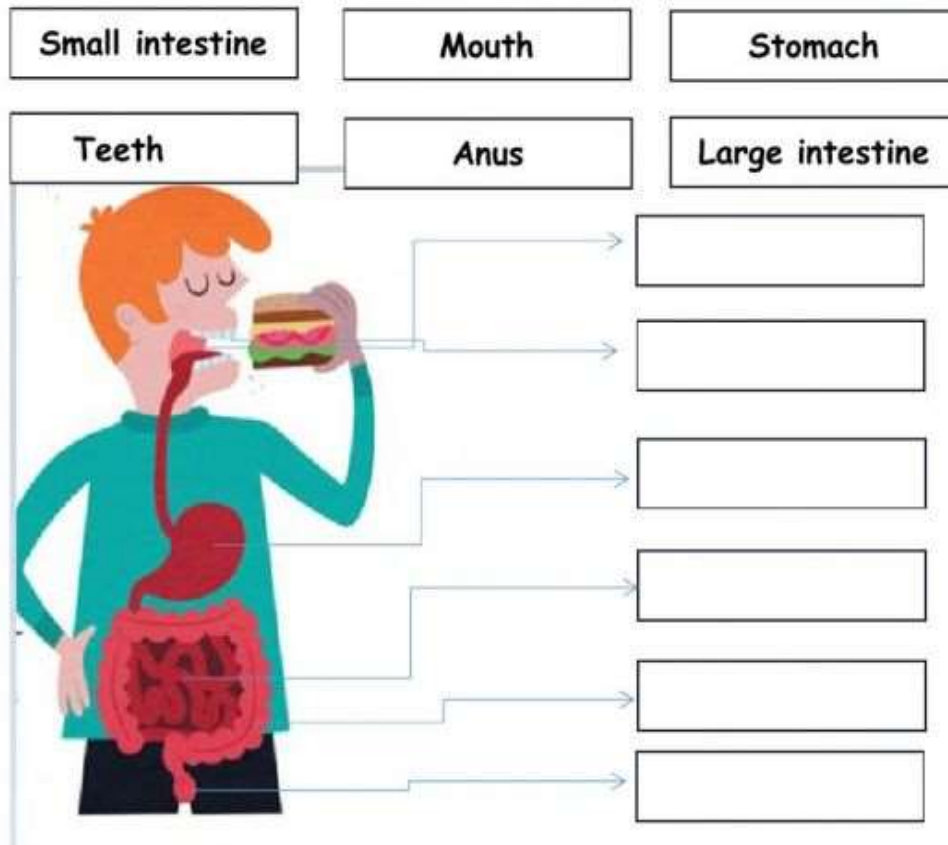
5. What are the functions of wisdoms?

.....



Digestive System

1. Drag and drop the main parts or organs in the drawing:



2. Read the text and select the right option:

We chew food with our _____.

The _____ breaks the food into nutrients.

The _____ absorbs the nutrients.

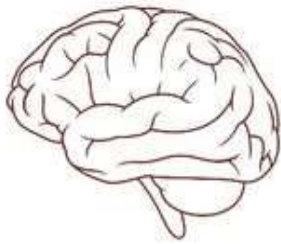
The _____ takes waste to the _____.

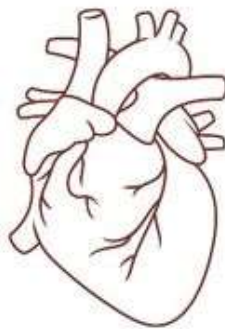
The waste goes out through the _____.

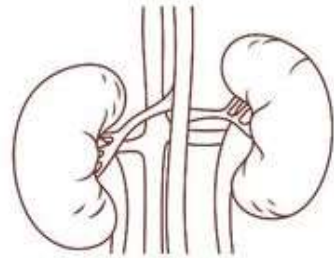
Name: _____

Date: _____

IDENTIFYING BODY ORGANS

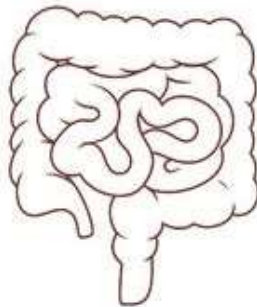


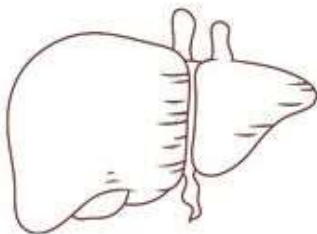














Maths Worksheet

1. Write the number name of the following:

2. 1089 _____
3. 9653 _____
4. 40853 _____
5. 89006 _____
6. 825698 _____
7. 693526 _____
8. 1008963 _____
9. 9600805 _____

2. Write in figures

1. Nine thousand nine. _____
2. Seventeen thousand four hundred two. _____
3. Eight lakh five. _____
4. Eighteen lakh nine thousand two hundred fifty. _____
5. Thirty lakh ninety. _____

3. Write the place value of underlined digit

3680754

7907642

68904

65439

478965

4. Solve the following

Round off 123 to the nearest 10. _____

Round off 475 to the nearest 100. _____

Round off 2517 to the nearest 1000. _____

Rounding off the number 3456 to the nearest 10, 100, and 1000.

5 Write the expanded form of the following:

4508

(_____ * _____) + (_____ * _____) + (_____ * _____) + (_____ * _____)

78902 _____

768902 _____

67098 _____

67812 _____

6 Arrange the following in ascending order:

(i) 2209, 2227, 2295, 2245, 2221.

(ii) 10076, 10086, 10056, 10065, 10001.

7 Compare using $>$, $=$, $<$:

- (a) 34872 ____ 34900
- (b) 87945 ____ 78945
- (c) 724582 ____ 88899
- (d) 206006 ____ 116116
- (e) 846470 ____ 847746
- (f) 42358 ____ 423580

8 Draw a circle around the greatest number:

- (a) 9212 9122 9211 9221
- (b) 5050 5550 5500 5005
- (c) 777 7070 7007 7700
- (d) 20050 20500 20005 25000

9 Draw a circle around the smallest number:

- (a) 28118 28108 28008 28180
- (b) 127582 125872 127528 127258
- (c) 437 4737 7437 774

10 Arrange the given numbers in descending order.

- (a) 71, 800; 40,875; 72,984; 6,98,504
- (b) 8,63,019; 8,60,548; 8,65,881; 8,59,004
- (c) 6,30,062; 1,63,050; 8,39,035; 5,69,204
- (d) 3,80,651; 3,37,547; 3,90,694; 3,36,880

11 Given below is the number of people visiting the three shopping malls in a week. Identify and tell which mall received the highest number of visitors and which mall received the least number of visitors.

Mall X – 9,02,200

Mall Y – 7,99,200

Mall Z – 9,18,700

12 Write each of the following in a Roman numeral:

(i) 31

(ii) 114

(iii) 253

(iv) 500

(v) 759

(vi) 999

(vii) 1008

(viii) 1198

(ix) 1305

(x) 1500

(xi) 1790

(xii) 1809

(xiii) 1506

(xiv) 2000

(xv) 1374

13 Write the Hindu-Arabic numeral for each of the following:

(i) IV

- (ii) IX
- (iii) XVI
- (iv) XVII
- (v) XX
- (vi) XXVIII
- (vii) XI
- (viii) L
- (ix) Lxxx
- (x) XL
- (xi) CD
- (xii) DCXLVII

14 Arrange the given Roman numerals in ascending order.

- (a) VII, II, XIV, X
- (b) VI, IX, III, VIII

15 Choose the right answer:

- (i) The greatest numeral in the given set is:
(a) XXXV; (b) XXIX; (c) XLIV; (d) LX
- (ii) The smallest numeral in the given set is:
(a) C; (b) V; (c) L; (d) X
- (iii) The number of days in the month of October are:
(a) XXVIII; (b) XXXI; (c) XXXIV; (d) X
- (iv) Number of years in a century:
(a) X; (b) L; (c) C; (d) CC
- (v) Number of weeks in a year:
(a) LII; (b) XXIV; (c) XXXVI; (d) L